

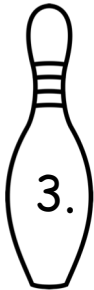






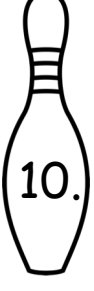


Name \_\_\_\_\_

Roll the bowling ball two times. Write an addition sentence to show how many pins fell down the first time, second time, and then how many you knocked down in all.



 1. _____ + _____ = _____	 2. _____ + _____ = _____
 3. _____ + _____ = _____	 4. _____ + _____ = _____
 5. _____ + _____ = _____	 6. _____ + _____ = _____
 7. _____ + _____ = _____	 8. _____ + _____ = _____
 9. _____ + _____ = _____	 10. _____ + _____ = _____